

Meno: _____

Trieda: _____



1. Vypočítaj.

$12 + 6 = \underline{\hspace{2cm}}$ $13 - 2 = \underline{\hspace{2cm}}$

$14 + 5 = \underline{\hspace{2cm}}$ $19 - 6 = \underline{\hspace{2cm}}$

$13 + 3 = \underline{\hspace{2cm}}$ $14 - 4 = \underline{\hspace{2cm}}$

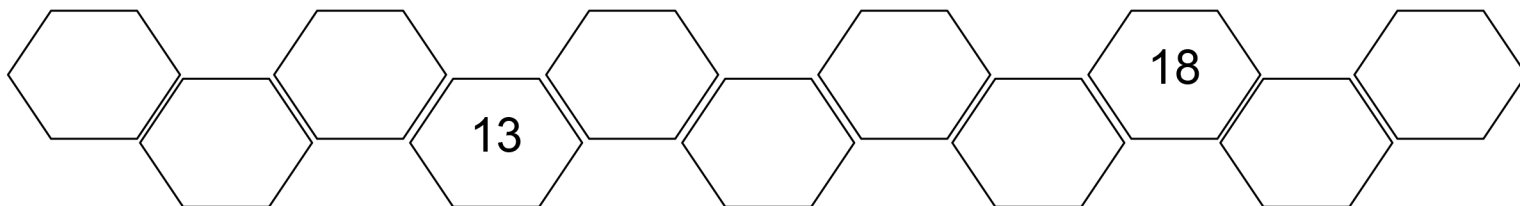
$3 + 15 = \underline{\hspace{2cm}}$ $17 - 6 = \underline{\hspace{2cm}}$

$2 + 15 = \underline{\hspace{2cm}}$ $16 - 10 = \underline{\hspace{2cm}}$

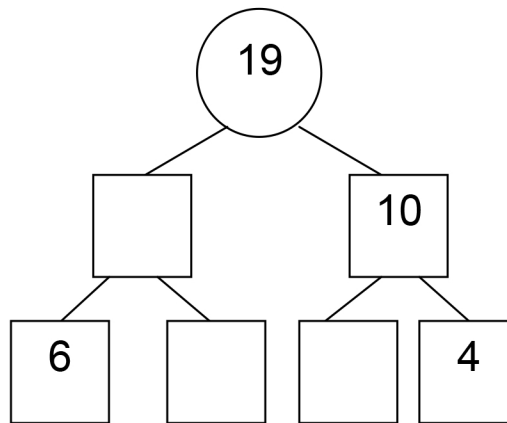
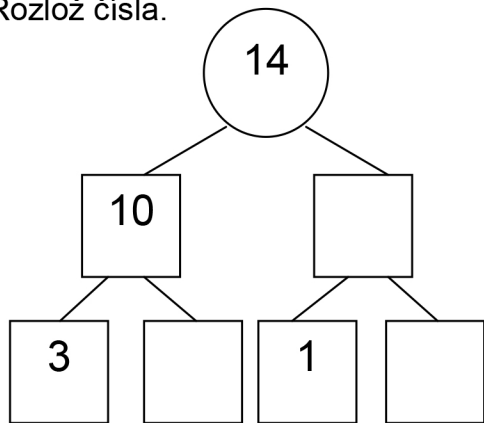
$4 + 16 = \underline{\hspace{2cm}}$ $19 - 19 = \underline{\hspace{2cm}}$

$2 + 18 = \underline{\hspace{2cm}}$ $20 - 15 = \underline{\hspace{2cm}}$

2. Doplň číselný rad.



3. Rozlož čísla.



4. Vypočítaj slovnú úlohu.

Garfield si veľmi rád oblieka tričká. Má 12 farebných tričiek a 7 bielych tričiek.

Koľko tričiek má Garfield?

Navrhni ako má vyzerat' Garfieldovo tričko.

Farebné tričká _____

Biele tričká _____

Spolu _____ ?

--	--	--	--	--

Garfield má _____ tričiek.

